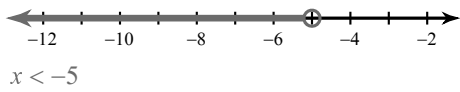


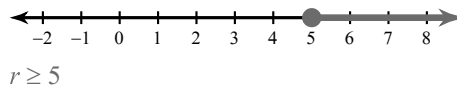
One-Step Inequalities

Solve each inequality and graph its solution.

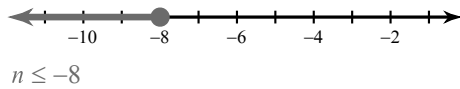
1) $-12 > x - 7$



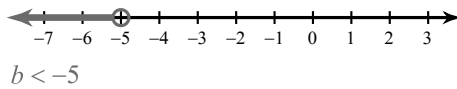
2) $-1 + r \geq 4$



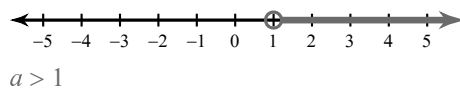
3) $n - 6 \leq -14$



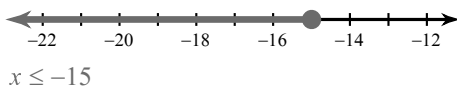
4) $b - 7 < -12$



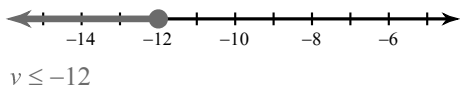
5) $a - 17 > -16$



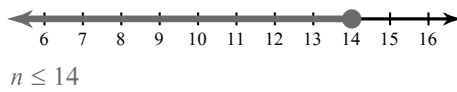
6) $15 + x \leq 0$



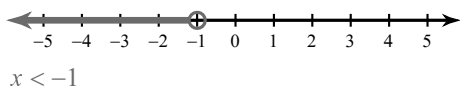
7) $3 + v \leq -9$



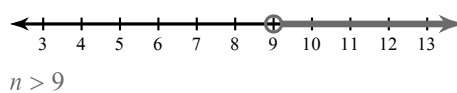
8) $8 \geq n - 6$



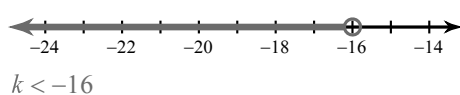
9) $-3x > 3$



10) $\frac{n}{3} > 3$



11) $\frac{k}{4} < -4$



12) $-9x \geq -90$

